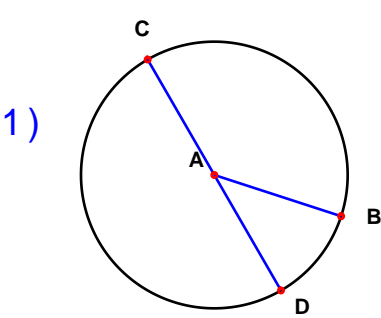


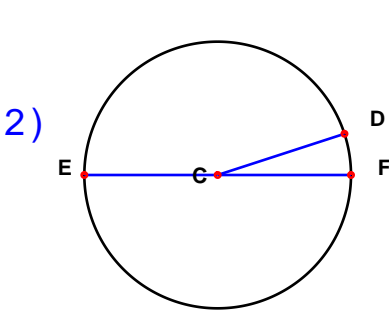
Name : \_\_\_\_\_ Score : \_\_\_\_\_

Teacher : \_\_\_\_\_ Date : \_\_\_\_\_

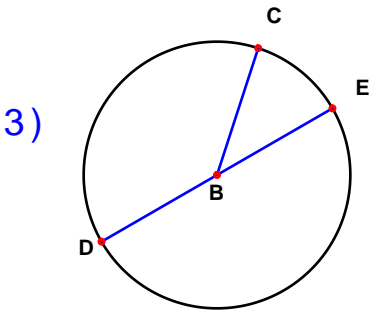
Identify the elements for each problem.



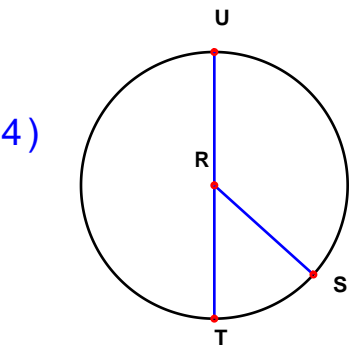
Circle: \_\_\_\_\_  
Radius: \_\_\_\_\_  
Diameter: \_\_\_\_\_



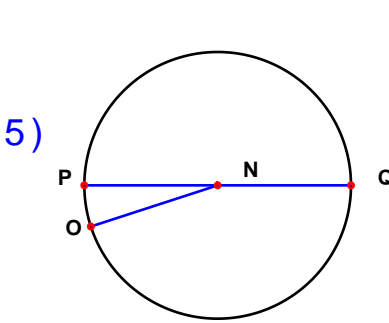
Circle: \_\_\_\_\_  
Radius: \_\_\_\_\_  
Diameter: \_\_\_\_\_



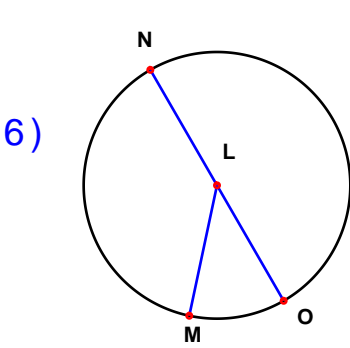
Circle: \_\_\_\_\_  
Radius: \_\_\_\_\_  
Diameter: \_\_\_\_\_



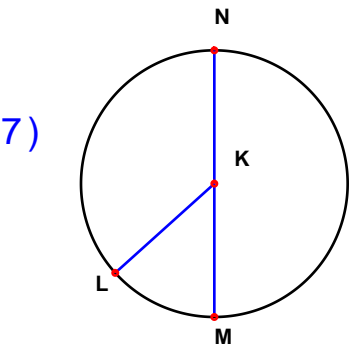
Circle: \_\_\_\_\_  
Radius: \_\_\_\_\_  
Diameter: \_\_\_\_\_



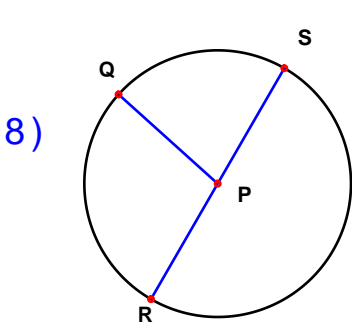
Circle: \_\_\_\_\_  
Radius: \_\_\_\_\_  
Diameter: \_\_\_\_\_



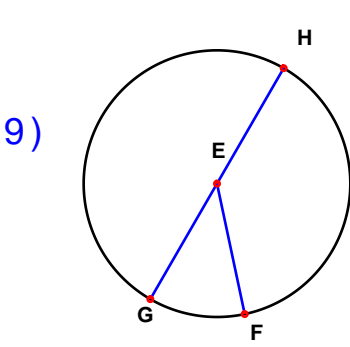
Circle: \_\_\_\_\_  
Radius: \_\_\_\_\_  
Diameter: \_\_\_\_\_



Circle: \_\_\_\_\_  
Radius: \_\_\_\_\_  
Diameter: \_\_\_\_\_



Circle: \_\_\_\_\_  
Radius: \_\_\_\_\_  
Diameter: \_\_\_\_\_



Circle: \_\_\_\_\_  
Radius: \_\_\_\_\_  
Diameter: \_\_\_\_\_

Name : \_\_\_\_\_

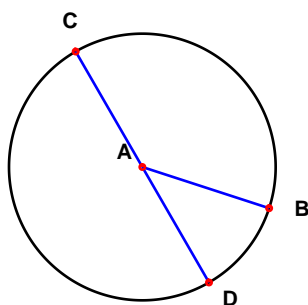
Score : \_\_\_\_\_

Teacher : \_\_\_\_\_

Date : \_\_\_\_\_

Identify the elements for each problem.

1)

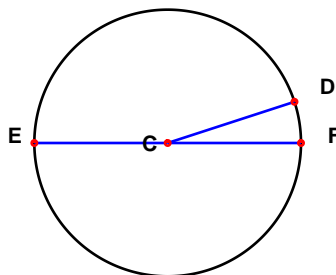


Circle: A

Radius: AB AC AD

Diameter: CD

2)

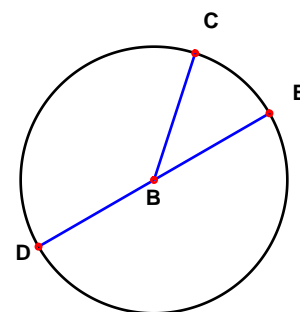


Circle: C

Radius: CD CE CF

Diameter: EF

3)

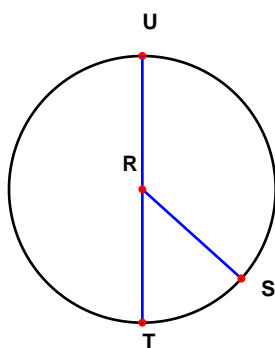


Circle: B

Radius: BC BD BE

Diameter: DE

4)

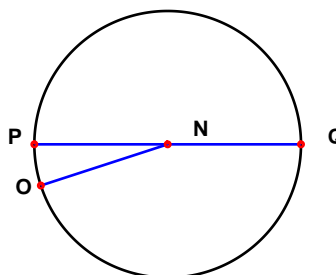


Circle: R

Radius: RS RT RU

Diameter: TU

5)

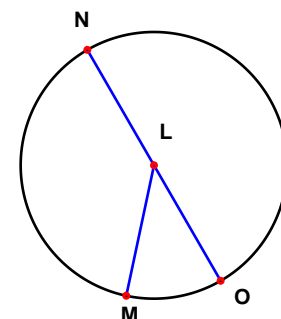


Circle: N

Radius: NO NP NQ

Diameter: PQ

6)

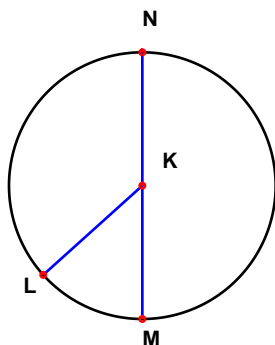


Circle: L

Radius: LM LN LO

Diameter: NO

7)

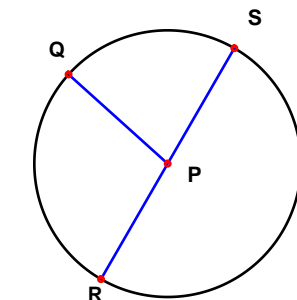


Circle: K

Radius: KL KM KN

Diameter: MN

8)

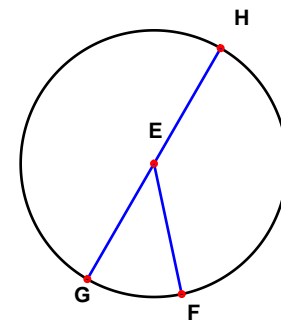


Circle: P

Radius: PQ PR PS

Diameter: RS

9)



Circle: E

Radius: EF EG EH

Diameter: GH